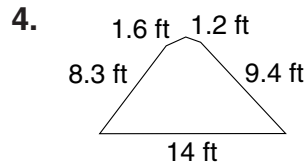
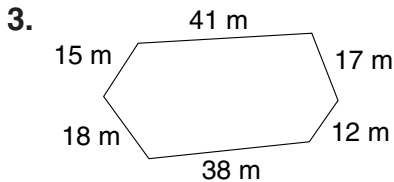
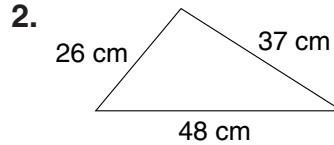
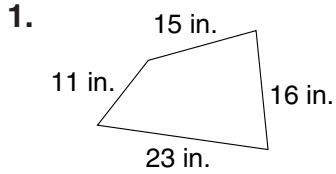




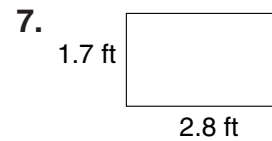
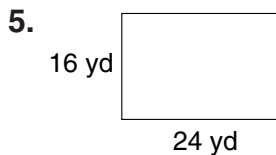
LESSON
10-1

Practice Perimeter

Find the perimeter of each figure.

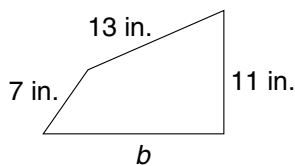


Find the perimeter P of each parallelogram.

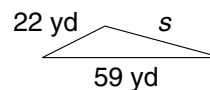


Find each unknown measure.

8. What is the length of side b if the perimeter equals 47 in.?



9. What is the length of side s if the perimeter equals 119 yd?



10. Benjamin is putting a fence around his rectangular-shaped yard. The yard is 38 feet long and 27 feet wide. How many feet of fencing does Benjamin need to surround his entire yard?
- _____

11. If you drove from Bakersville to Salem and then to San Mateo, your entire 81-mile journey would form a triangle. The distance from Salem to San Mateo is 24 miles. The distance from Bakersville to San Mateo is 40 miles. How many miles is it from Salem to Baskerville?
- _____