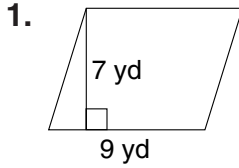


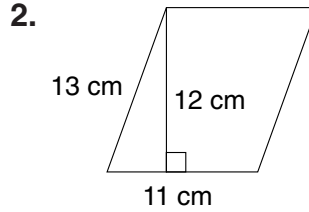


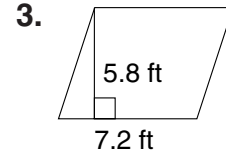
LESSON
10-3

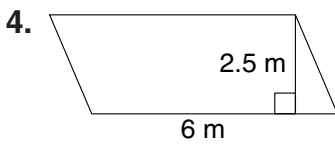
Practice
Area of Parallelograms

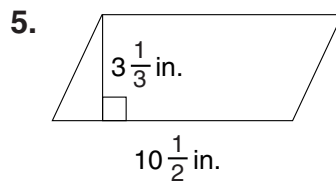
Find the area of each parallelogram.

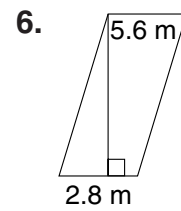




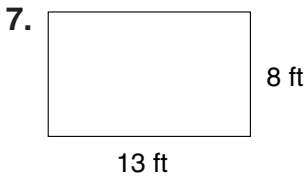


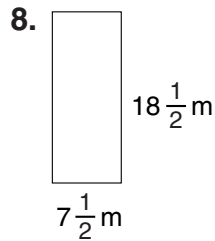


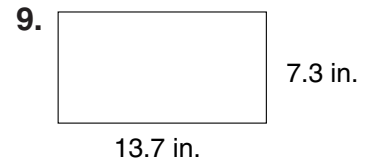




Find the area of each rectangle.







10. A dollar bill is 15.5 cm long and 6.5 cm wide. What is the area of a dollar bill?

11. A rectangular hallway has an area of 70 ft^2 . The width of the hallway is 4 feet. What is the length of the hallway?
