



LESSON

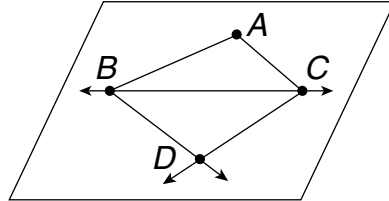
9-1

Practice

Introduction to Geometry

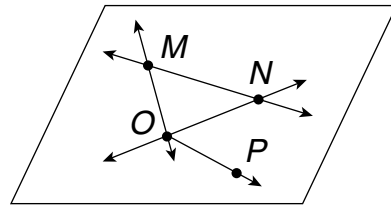
Identify the figures in the diagram.

1. three points _____
2. one line _____
3. a plane _____
4. four rays _____
5. three line segments _____



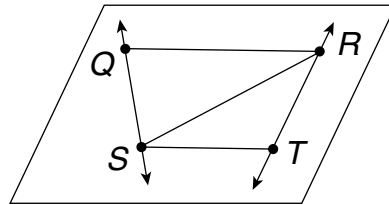
Identify the figures in the diagram.

6. four points _____
7. three lines _____
8. a plane _____
9. three rays _____
10. four line segments _____



Identify the figures in the diagram.

11. four points _____
12. two lines _____
13. a plane _____
14. four rays _____
15. five line segments _____



16. Identify the line segments that are congruent in the figure.

