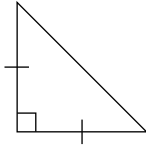


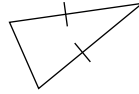


Classify each triangle according to its sides and angles.

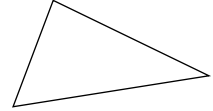
1.



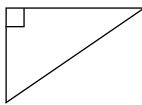
2.



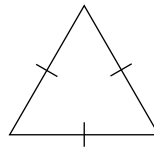
3.



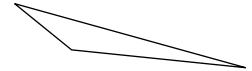
4.




5.



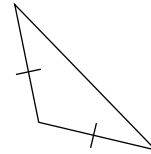
6.



7.



8.

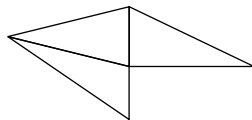


9.



Identify the different types of triangles in each figure and determine how many of each there are.

10.



11.

