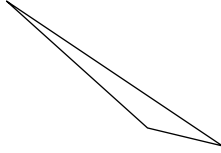


LESSON
9-6

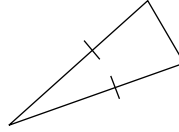
Practice C
Classifying Triangles

Classify each triangle according to its sides and angles.

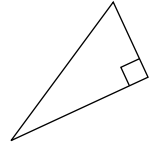
1.



2.



3.



Classify each triangle according to the lengths of its sides.

4. 9.9 cm, 9 cm, 0.99 cm

5. 40 ft, 4 ft, 40 ft

6. 22 ft, 22 ft, 21 ft

7. 2.3 in., 2.3 in., 2.3 in.

8. 5.6 m, 5.06 m, 5.16 m

9. 19 cm, 18 cm, 19 cm

Classify each triangle according to the measures of its angles.

10. 25° , 75° , 80°

11. 178° , 1° , 1°

12. 90° , 40° , 50°

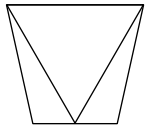
13. 45° , 40° , 95°

14. 23° , 90° , 67°

15. 55° , 60° , 65°

Identify the different types of triangles in each figure and determine how many of each there are.

16.



17.

