



LESSON

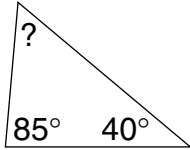
9-7

Practice

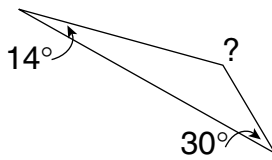
Angle Measures in Triangles

Find the unknown angle measure in each triangle.

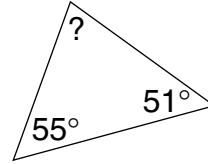
1.



2.



3.



Use the diagram to find the measure of each indicated angle.

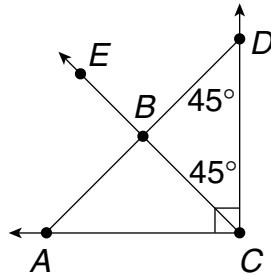
4. $\angle CBD$ _____

5. $\angle DAC$ _____

6. $\angle ABC$ _____

7. $\angle EBA$ _____

8. $\angle ACB$ _____



9. The figure shows a design for a new intersection. Find the unknown angle measure a . Show your work.

