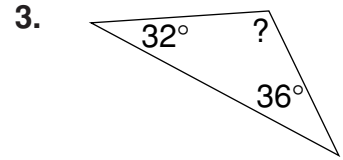
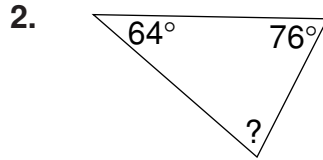
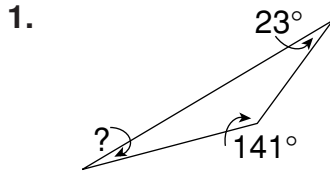


LESSON
9-7 **Practice C**
Angle Measures in Triangles

Find the unknown angle measure in each triangle.



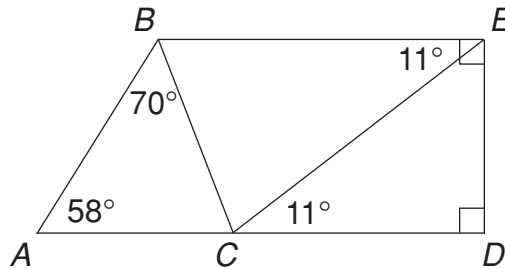
Use the diagram to find the measure of each indicated angle.

4. $\angle DEC$ _____

5. $\angle ACB$ _____

6. $\angle BCE$ _____

7. $\angle EBC$ _____



8. The figure shows a design for a detail of an art project. Find the unknown angle measure x . Show your work.

