

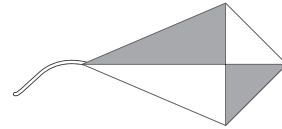
LESSON
9-9 **Practice C**
Congruent Figures

Identify any figures that appear to be congruent.

1.

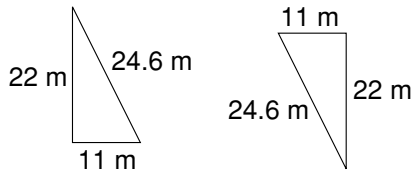


2.

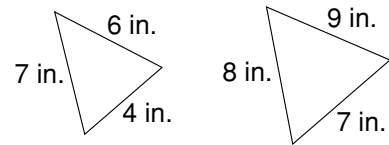


Determine whether the triangles are congruent.

3.

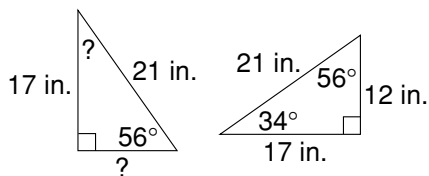


4.

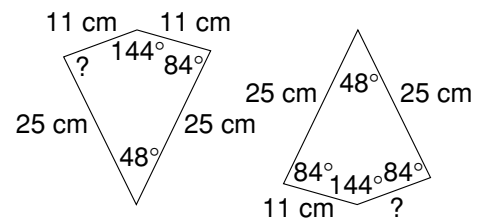


Determine the missing measures in each set of congruent polygons.

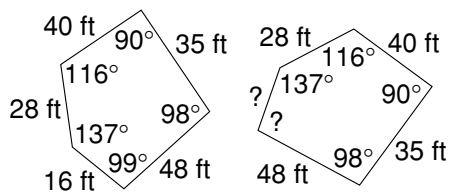
5.



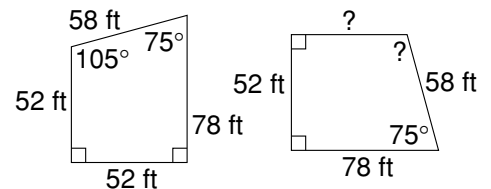
6.



7.



8.



9. Describe how to determine if two hexagons are congruent.
