



LESSON


**6-1**

**Practice**

**Introduction to Percents**

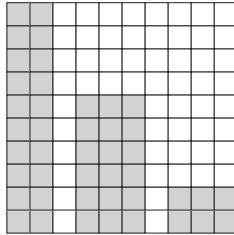
Write the percent modeled by each grid.

1.



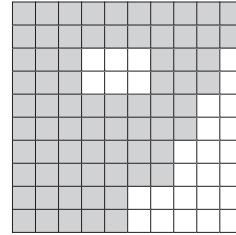
\_\_\_\_\_

2.



\_\_\_\_\_

3.



\_\_\_\_\_

Write each percent as a fraction in simplest form.

4. 16%

\_\_\_\_\_

5. 49%

\_\_\_\_\_

6. 20%

\_\_\_\_\_

7. 15%

\_\_\_\_\_

8. 18%

\_\_\_\_\_

9. 60%

\_\_\_\_\_

10. 35%

\_\_\_\_\_

11. 46%

\_\_\_\_\_

12. 86%

\_\_\_\_\_

13. 79%

\_\_\_\_\_

14. 56%

\_\_\_\_\_

15. 45%

\_\_\_\_\_

Write each percent as a decimal.

16. 33%

\_\_\_\_\_

17. 57%

\_\_\_\_\_

18. 46%

\_\_\_\_\_

19. 6%

\_\_\_\_\_

20. 4.7%

\_\_\_\_\_

21. 13.2%

\_\_\_\_\_

22. 75.8%

\_\_\_\_\_

23. 4%

\_\_\_\_\_

24. 1.16%

\_\_\_\_\_

25. 27.05%

\_\_\_\_\_

26. 93.01%

\_\_\_\_\_

27. 7.9%

\_\_\_\_\_