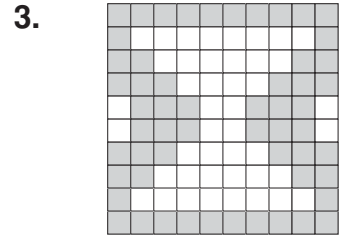
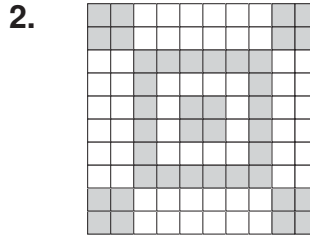
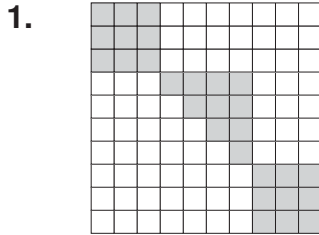


LESSON
6-1 **Practice C**
Introduction to Percents

Write the percent modeled by each grid.



Write each percent as a fraction in simplest form and as a decimal.

4. 29%

5. 87.5%

6. 7.5%

7. 64%

8. 62.5%

9. 34%

10. 22.5%

11. 12.5%

12. 3.6%

13. 5.9%

14. 7.2%

15. 20.5%

Compare. Write $<$, $>$, or $=$.

16. $\frac{19}{100}$ 9%

17. $\frac{44}{100}$ 44%

18. $\frac{38}{100}$ 39%

19. $\frac{12}{25}$ 40%

20. $\frac{19}{20}$ 96%

21. $\frac{27}{50}$ 52%

22. $\frac{7}{40}$ 17.5%

23. $\frac{5}{12}$ 41%

24. $\frac{1}{16}$ 6.5%
